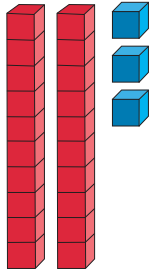


# Place Value Activity Sheet


Name: \_\_\_\_\_ Date: \_\_\_\_\_

Write how many tens and ones there are.



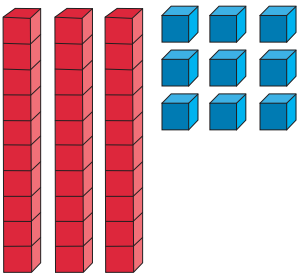
\_\_\_\_\_ tens \_\_\_\_\_ ones

\_\_\_\_\_ + \_\_\_\_\_ = \_\_\_\_\_



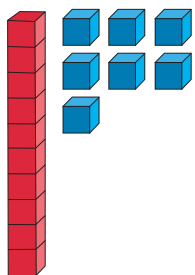
\_\_\_\_\_ tens \_\_\_\_\_ one

\_\_\_\_\_ + \_\_\_\_\_ = \_\_\_\_\_



\_\_\_\_\_ tens \_\_\_\_\_ ones

\_\_\_\_\_ + \_\_\_\_\_ = \_\_\_\_\_



\_\_\_\_\_ ten \_\_\_\_\_ ones

\_\_\_\_\_ + \_\_\_\_\_ = \_\_\_\_\_

Draw this number in base 10 and write the number sentence below.

4 tens 5 ones

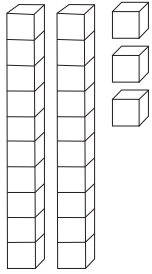
\_\_\_\_\_ + \_\_\_\_\_ = \_\_\_\_\_



# Place Value Activity Sheet Answers


Name: \_\_\_\_\_ Date: \_\_\_\_\_

Write how many tens and ones there are.



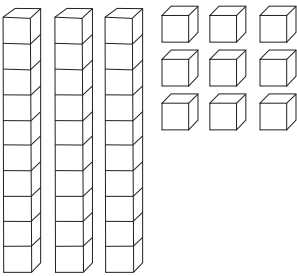
2 tens 3 ones

$$\underline{20} + \underline{3} = \underline{23}$$



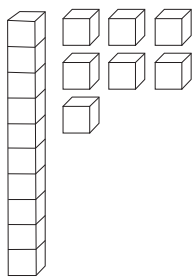
6 tens 1 one

$$\underline{60} + \underline{1} = \underline{61}$$



3 tens 9 ones

$$\underline{30} + \underline{9} = \underline{39}$$



1 ten 7 ones

$$\underline{10} + \underline{7} = \underline{17}$$

Draw this number in base 10 and write the number sentence below.

4 tens 5 ones

$$\underline{40} + \underline{5} = \underline{45}$$

